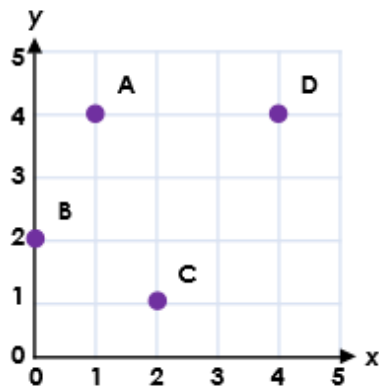


1a. Are the coordinates of each point correct?

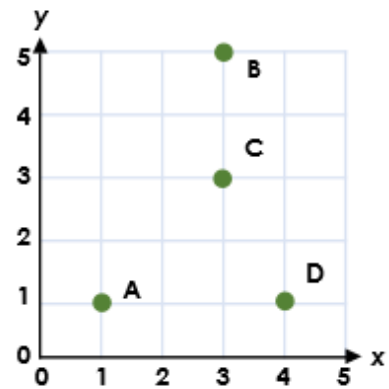


A = (4, 1) B = (0, 2)
C = (2, 1) D = (4, 3)

4 VF



1b. Are the coordinates of each point correct?

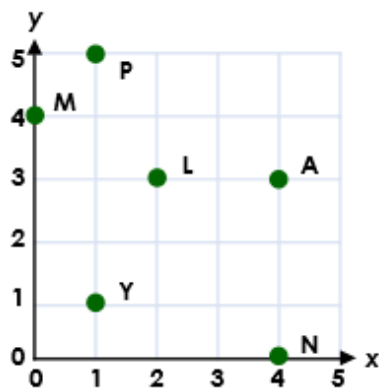


A = (1, 1) B = (5, 3)
C = (3, 4) D = (4, 1)

4 VF

2a. Find the coordinates in order. What word do the letters spell?

(0, 4) (4, 3) (4, 0) (1, 1)

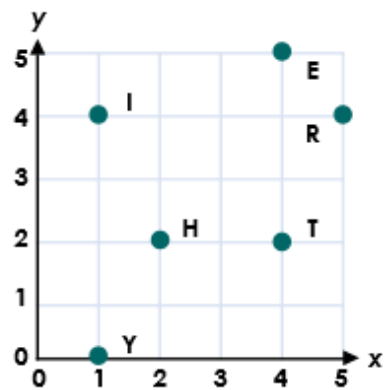


4 VF



2b. Find the coordinates in order. What word do the letters spell?

(4, 2) (2, 2) (4, 5) (1, 0)



4 VF